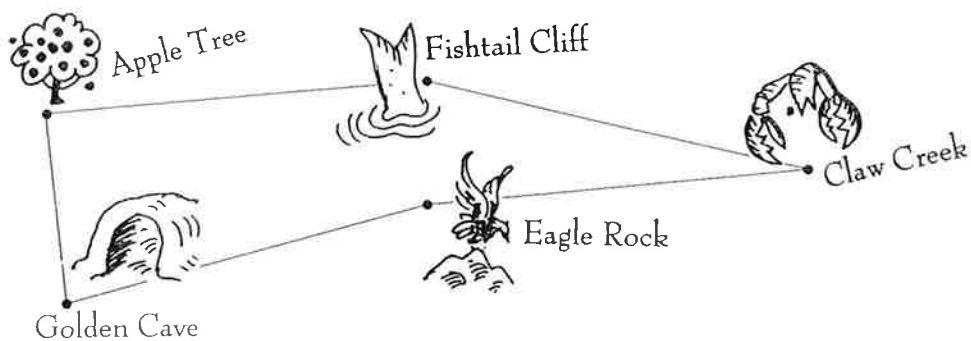


Let's Go On A Treasure Hunt!

Start at the apple tree, continue to each spot on the map until we return to the beginning.

Let's keep track of the miles we walk.



1 inch = 1 mile

Apple Tree to Fishtail Cliff = ____ miles

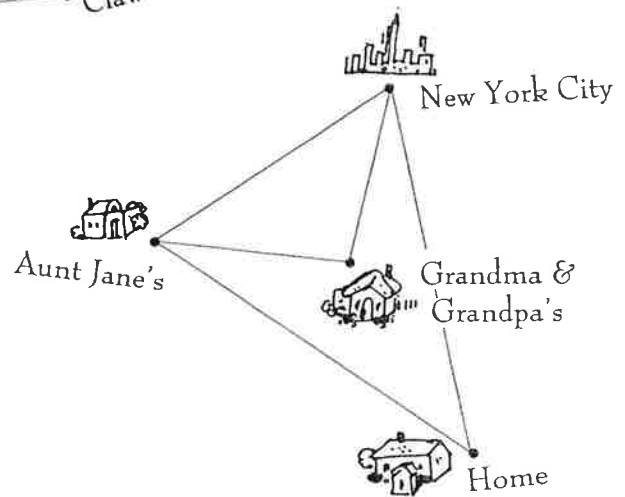
Fishtail Cliff to Claw Creek = ____ miles

Claw Creek to Eagle Rock = ____ miles

Eagle Rock to Golden Cave = ____ miles

Golden Cave to Apple tree = ____ miles

Total miles walked = ____ miles



$\frac{1}{8}$ inch = 100 miles

This year on our vacation, we are flying to visit Aunt Jane, Grandma and Grandpa, New York City and then home again. How many miles will we fly altogether?

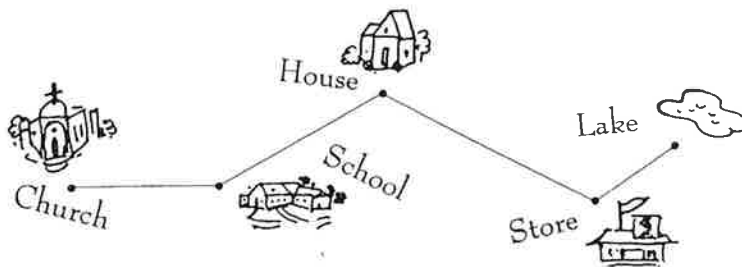
Home to Aunt Jane's = ____ miles

Aunt Jane's to Grandma & Grandpa's = ____ miles

Grandma & Grandpa's To New York City = ____ miles

New York City to home = ____ miles

Total miles = ____ miles



$\frac{1}{4}$ inch = 1 mile

After church we are all riding our bikes to the lake for a picnic. How many miles are we going to ride?

Church to the school = ____ miles

School to the house = ____ miles

House to the store = ____ miles

Store to the lake = ____ miles

Total miles walked = ____ miles