


Cynthia Lanus







## No Matter What Shape Your Fractions are In


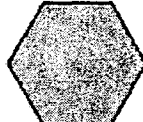
### Determining the Relations


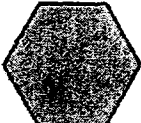
Use the  pattern blocks to answer the following questions.

1. How many  are in  ?

2. How many  are in  ?

3. How many  are in  ?

4. How many  are in  ?

5. How many  are in  ?

6. How many  are in  ?